

For Examiners' use only:

Question	1 – 3	4 – 7	8	9 - 13	Total
Mark	/9	/19	/17	/15	/60

CHEM 111 TEST

Monday, 28 April, 2008

Name (Print clearly):

Student ID No:

Signature:

Instructions:

Attempt **all** questions. Enter answers in the spaces provided (continue on the back of the **opposite** sheet if necessary).

Total marks: 60

Time allowed: 60 minutes

Note:

At the end of this paper is:

1. a periodic table, and
2. a sheet containing physical chemistry formulae.

[Please check that both of these pages are attached before starting to answer the test paper!]

1. (4 marks)

For the elements below, give the full electron configurations. (Use Ne ($Z = 10$) $(1s)^2 (2s)^2 (2p)^6$ as a model.)

Ca ($Z = 20$)

Cu ($Z = 29$)

2. (3 marks)

Bromine is an element that has two stable isotopes in roughly equal abundance. For the isotopic cation $^{79}\text{Br}^+$, give the following:

(a) The number of protons per ion

(b) The number of electrons per ion

(c) The number of neutrons per ion

3. (2 marks)

Draw the Lewis dot structure for the nitrate anion, NO_3^- , and select from the possibilities below the number of single bonds, double bonds and lone pairs.

(a) 2,1,10

(b) 3,1,9

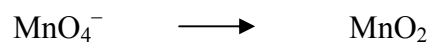
(c) 3,0,10

(d) 1, 2, 7

(e) 2,1,8

4. (4 marks)

Write a balanced half equation for the following (incomplete) ion-electron reaction occurring in **basic** solution

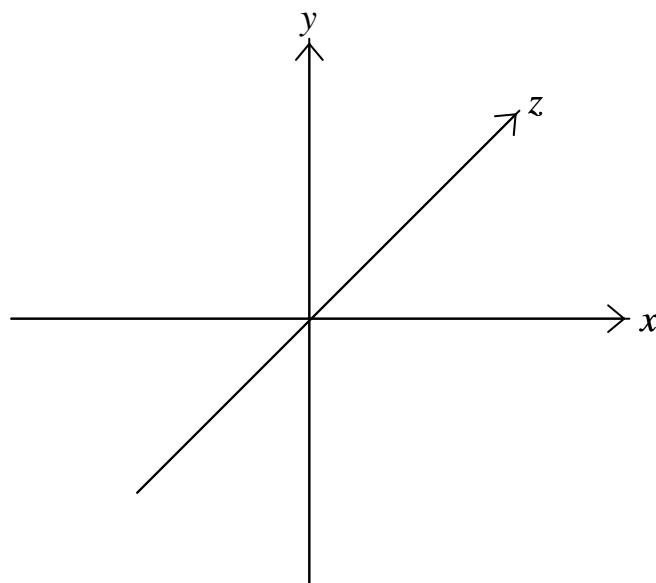


What are the two oxidation states of Mn in the reaction?

What colour change would you see?

5. (2 marks)

Sketch a probability distribution for a $2p_y$ atomic orbital.



6. (7 marks)

A 3.2 L flask at 20 °C contains a mixture of two gases and a small quantity (< 1 mL) of liquid water at equilibrium. The gases are N₂ at a partial pressure of 0.79 atm and O₂ at a partial pressure of 0.20 atm.

At 20 °C, the vapour pressure of water is 17.5 mm of Hg; 1 atm = 760 mm of Hg = 1.013 × 10⁵ Pa; $R = 8.314 \text{ J mol}^{-1} \text{ K}^{-1}$.

(a) What is the total pressure in the flask in atm.?

(b) Of the gas, what is the mole fraction of O₂, X_{O_2} in the flask?

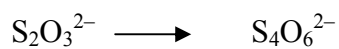
(c) What is the partial pressure of O₂ in the flask in units of Pa?

(d) Calculate the number of moles of O₂ in the flask. (For the purposes of this calculation ignore the small volume occupied by the liquid water).


7. (6 marks)

25.7 mL of a solution of 0.015 mol L^{-1} sodium thiosulfate ($\text{S}_2\text{O}_3^{2-}$) reacts to completion with 15.5 mL of iodine solution in neutral conditions to give as products tetrathionate ($\text{S}_4\text{O}_6^{2-}$) and iodide (I^-).

(a) Write a balanced ion-electron half equation for



(b) Write a balanced ion-electron half equation for



(c) Write a balanced equation for the overall redox reaction.

(d) Calculate the concentration of the iodine solution.

(e) What indicator would you use to enhance the colour change of this reaction?

8. (17 marks)

$\Delta U^\circ = -5\,172\text{ kJ mol}^{-1}$ for the combustion of solid naphthalene, $\text{C}_{10}\text{H}_8(\text{s})$.

(a) (i) Define the change in internal energy, ΔU , for a reaction.

(ii) Write the balanced chemical equation for the combustion of 1 mol of naphthalene at 298 K.

(iii) Calculate ΔH° for the combustion of naphthalene.

$[R = 8.314\text{ J K}^{-1}\text{ mol}^{-1}]$

(iv) Calculate q_P (i.e., q at constant pressure) for combustion of 0.1 mol of naphthalene at 298 K.

(v) Calculate w_P (i.e., w at constant pressure) for combustion of 1 mol of naphthalene at 298 K.

(b) A constant-**volume** calorimeter containing 1.000 kg of water is calibrated by combustion of 1.28 g of naphthalene in it at 298 K. A temperature rise of 6.56 °C is observed.

[Useful information: $M(\text{C}_{10}\text{H}_8) = 128 \text{ g mol}^{-1}$; specific heat of water: $4.184 \text{ J g}^{-1} \text{ K}^{-1}$;

ΔU° for combustion of naphthalene is given at start of question]

(i) Sketch a constant-volume calorimeter, labelling its essential features.



(ii) Calculate the heat capacity of the complete calorimeter, including the water.



(iii) Calculate the heat capacity of the empty calorimeter, excluding the water.

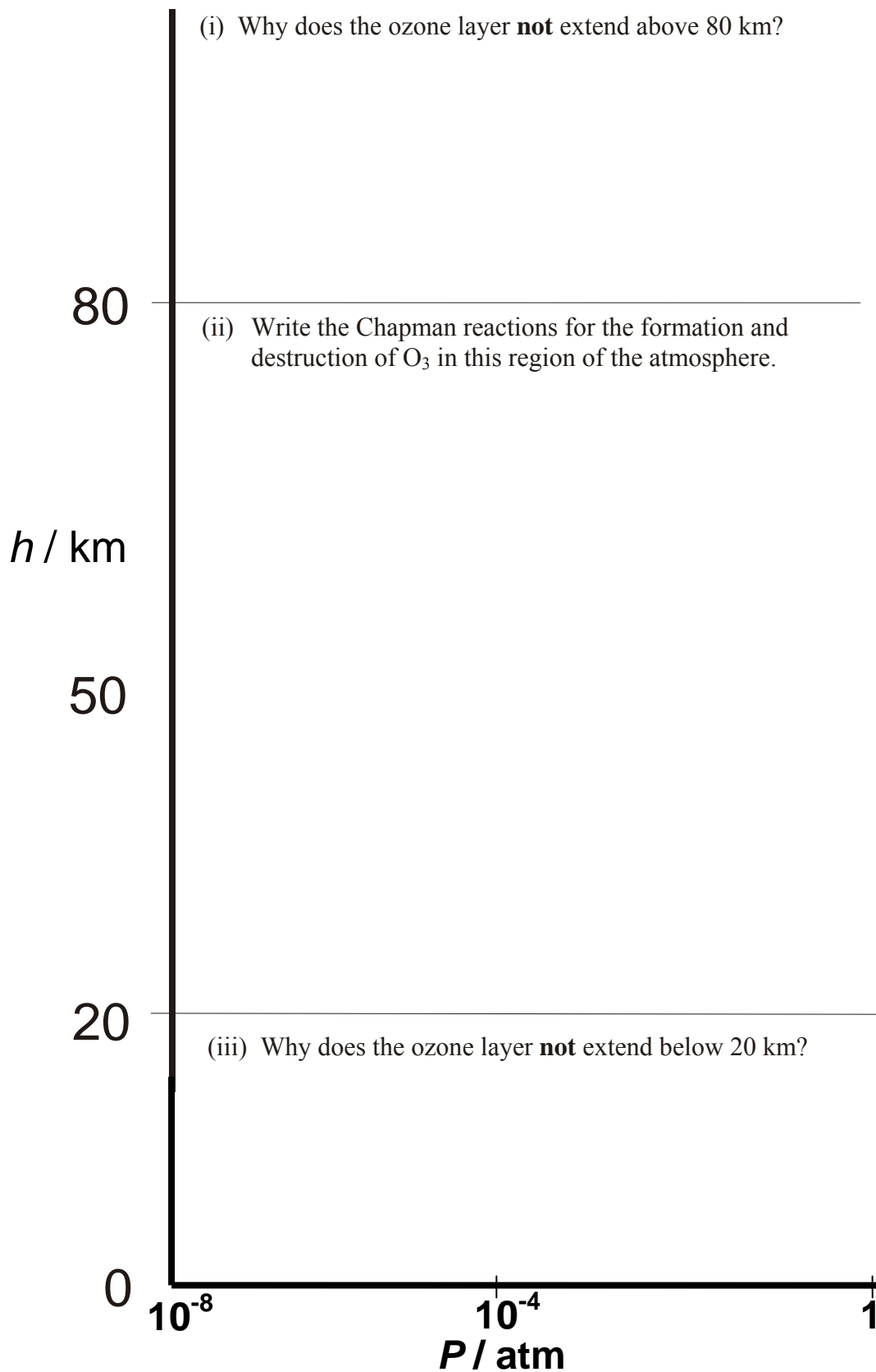


9. (7 marks)

Complete the plot of Earth's atmosphere below, where h is altitude:

(a) sketch the partial pressure profile for the ozone layer;

(b) answer the questions in the spaces provided.



10. (3 marks)

Over Antarctica in the late Autumn and Winter, HCl and ClONO₂, which are formed in the gas phase, are adsorbed onto ice crystals in the polar stratospheric clouds. Write chemical equations to show

- (a) the reaction of these species on the ice crystals over Winter, and
- (b) the effect of sunlight on the products when Spring returns to the Antarctic continent.

--

11. (2 marks)

List the four essential ingredients for the formation of photochemical smog.

1.	
2.	
3.	
4.	

12. (2 marks)

Write chemical equations to explain how ozone is produced under conditions favourable for the development of photochemical smog.

13. (1 mark)

Circle the number, in each of the columns below, that **most closely** matches the average level of CO₂ in the Earth's atmosphere, expressed in units of ppm, for the year 1800 (pre-industrial revolution) and the present time.

from close to --- ppm in the year 1800	to --- ppm in 2008
220	330
240	360
260	380
280	390

Physical Chemistry Formulae

$$PV = nRT$$

$$P_A = x_A P_{\text{total}}$$

$$\text{where } P_{\text{total}} = P_A + P_B \quad \text{and} \quad x_i = \frac{n_i}{\sum_i n_i}$$

$$P_A = X_A P_A^\circ$$

$$P_B = (k_H)_B X_B$$

$$\Delta U = q + w$$

$$w_p = -P\Delta V$$

$$H = U + PV$$

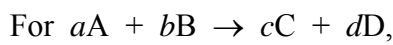
$$\Delta H = \Delta U + RT\Delta n_{\text{gas}} \quad \text{when } \Delta T = 0$$

$$\Delta H(T_2) = \Delta H(T_1) + \Delta C_P(T_2 - T_1)$$

$$C_P = dH/dT \quad (\text{when } \Delta P = 0)$$

$$C_V = dU/dT \quad (\text{when } \Delta V = 0)$$

$$\Delta H_{\text{reaction}} = \sum_{\text{prods}} \nu_{\text{prod}} \Delta H_f(\text{prod}) - \sum_{\text{reacts}} \nu_{\text{react}} \Delta H_f(\text{react})$$



$$\text{Rate} = \frac{-1}{a} \frac{d[A]}{dt} = \frac{-1}{b} \frac{d[B]}{dt} = \frac{1}{c} \frac{d[C]}{dt} = \frac{1}{d} \frac{d[D]}{dt}$$

$$\text{For Rate} = \frac{-d[A]}{dt} = k,$$

$$[A] = [A]_0 - kt$$

$$\text{For Rate} = \frac{-d[A]}{dt} = k[A],$$

$$[A] = [A]_0 e^{-kt} \quad \text{and} \quad t_{1/2} = (1/k) \log_e(2)$$

$$k = A e^{-E_a/RT}$$

$$\log_e \left(\frac{k_2}{k_1} \right) = \frac{E_a}{R} \left(\frac{1}{T_1} - \frac{1}{T_2} \right)$$

$$K_a = \frac{[H^+][A^-]}{[HA]}$$

$$K_b = \frac{[BH^+][OH^-]}{[B]}$$

$$\text{pH} = -\log_{10}[H^+]$$

$$\text{pH} = \text{p}K_a + \log_{10} \left(\frac{[A^-]}{[HA]} \right) = \text{p}K_a + \log_{10}(n(A^-)/n(HA))$$

$$\Delta S = \sum_{\text{prods}} \nu_{\text{prod}} S(\text{prod}) - \sum_{\text{reacts}} \nu_{\text{react}} S(\text{react})$$

$$\Delta S_{\text{phase change}} = \frac{\Delta H_{\text{phase change}}}{T_{\text{critical}}}$$

$$\Delta S_{\text{surr}} = \frac{-\Delta H_{\text{sys}}}{T}$$

$$\Delta G = \Delta H - T\Delta S$$

$$\Delta G = \sum_{\text{prods}} \nu_{\text{prod}} \Delta G_f(\text{prod}) - \sum_{\text{reacts}} \nu_{\text{react}} \Delta G_f(\text{react})$$

$$\Delta G = \Delta G^\circ + RT \log_e Q$$

$$\Delta G^\circ = -RT \log_e K$$

$$\log_e K = \frac{-\Delta H^\circ}{RT} + \frac{\Delta S^\circ}{R}$$

$$\log_e \left(\frac{K_2}{K_1} \right) = \frac{\Delta H^\circ}{R} \left(\frac{1}{T_1} - \frac{1}{T_2} \right)$$

$$E_{\text{cell}} = E_{\text{RHS}} - E_{\text{LHS}} = E_{\text{cathode}} - E_{\text{anode}}$$

$$w_{\text{elect}} = \Delta G = -nFE$$

$$\Delta G^\circ = -RT \log_e K = -nFE^\circ$$

$$E^\circ = \frac{RT}{nF} \log_e K = \frac{2.303RT}{nF} \log_{10} K$$

$$\text{At } 25^\circ\text{C: } E^\circ = \frac{0.0591 \text{ V}}{n} \log_{10} K$$

$$E = E^\circ - \frac{RT}{nF} \log_e Q = E^\circ - \frac{2.303RT}{nF} \log_{10} Q$$

$$\text{At } 25^\circ\text{C: } E = E^\circ - \frac{0.0591 \text{ V}}{n} \log_{10} Q$$

R Gas constant (8.314 J mol⁻¹ K⁻¹ or 0.082 L atm mol⁻¹ K⁻¹)

F Faraday constant (96489 C mol⁻¹)

Periodic Table

1 H 1.008																2 He 4.00	
3 Li 6.94	4 Be 9.01											5 B 10.8	6 C 12.01	7 N 14.01	8 O 16.00	9 F 19.0	10 Ne 20.2
11 Na 23.0	12 Mg 24.3											13 Al 27.0	14 Si 28.1	15 P 31.0	16 S 32.1	17 Cl 35.5	18 Ar 39.9
19 K 39.1	20 Ca 40.1	21 Sc 45.0	22 Ti 47.9	23 V 50.9	24 Cr 52.0	25 Mn 54.9	26 Fe 55.9	27 Co 58.9	28 Ni 58.7	29 Cu 63.5	30 Zn 65.4	31 Ga 69.7	32 Ge 72.6	33 As 74.9	34 Se 79.0	35 Br 79.9	36 Kr 83.8
37 Rb 85.5	38 Sr 87.6	39 Y 88.9	40 Zr 91.2	41 Nb 92.9	42 Mo 95.9	43 Tc (99)	44 Ru 101.1	45 Rh 102.9	46 Pd 106.4	47 Ag 107.9	48 Cd 112.4	49 In 114.8	50 Sn 118.7	51 Sb 121.8	52 Te 127.6	53 I 126.9	54 Xe 131.3
55 Cs 132.9	56 Ba 137.3	57-71 see below	72 Hf 178.5	73 Ta 181.0	74 W 183.9	75 Re 186.2	76 Os 190.2	77 Ir 192.2	78 Pt 195.1	79 Au 197.0	80 Hg 200.6	81 Tl 204.4	82 Pb 207.2	83 Bi 209.0	84 Po (210)	85 At (210)	86 Rn (222)
87 Fr (223)	88 Ra (226)	89-103 see below	104 Rf (257)	105 Db (260)	106 Sg (263)	107 Bh (262)	108 Hs (265)	109 Mt (266)	110	111	112						

57 La 138.9	58 Ce 140.1	59 Pr 140.9	60 Nd 144.2	61 Pm (147)	62 Sm 150.4	63 Eu 152.0	64 Gd 157.3	65 Tb 158.9	66 Dy 162.5	67 Ho 164.9	68 Er 167.3	69 Tm 168.9	70 Yb 173.0	71 Lu 175.0
-------------------	-------------------	-------------------	-------------------	-------------------	-------------------	-------------------	-------------------	-------------------	-------------------	-------------------	-------------------	-------------------	-------------------	-------------------

89 Ac (227)	90 Th 232.0	91 Pa (231)	92 U 238.1	93 Np (237)	94 Pu (242)	95 Am (243)	96 Cm (247)	97 Bk (245)	98 Cf (251)	99 Es (254)	100 Fm (253)	101 Md (256)	102 No (254)	103 Lr (257)
-------------------	-------------------	-------------------	------------------	-------------------	-------------------	-------------------	-------------------	-------------------	-------------------	-------------------	--------------------	--------------------	--------------------	--------------------

